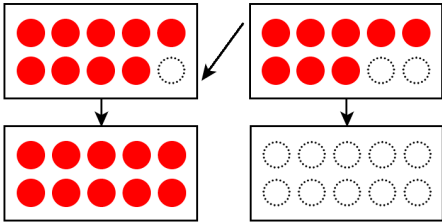


# くりあがりのあるたしざん(2の4)

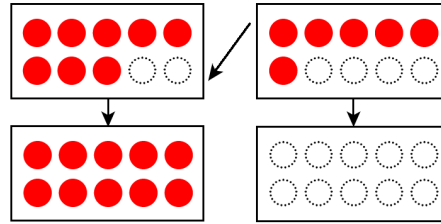
たしざんをしましょう。あいている□にすうじをかきましょう。

$$9 + 8 = \square$$



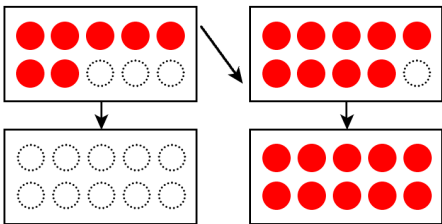
$$\square + \square = \square$$

$$8 + 6 = \square$$



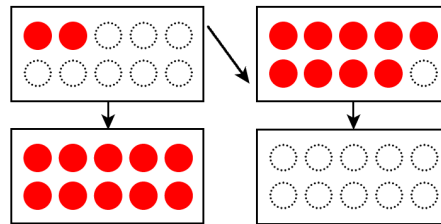
$$\square + \square = \square$$

$$7 + 9 = \square$$



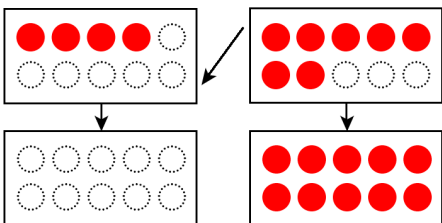
$$\square + \square = \square$$

$$2 + 9 = \square$$



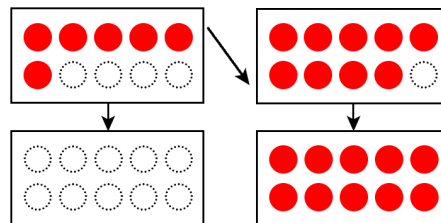
$$\square + \square = \square$$

$$4 + 7 = \square$$



$$\square + \square = \square$$

$$6 + 9 = \square$$



$$\square + \square = \square$$