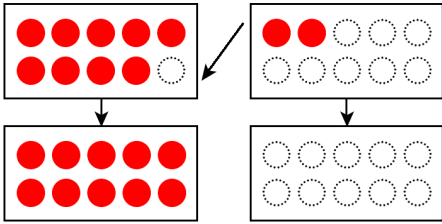


# くりあがりのあるたしざん(2の1)

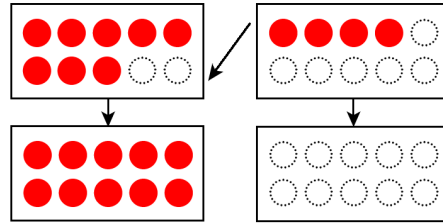
たしざんをしましょう。あいている□にすうじをかきましょう。

$$9 + 2 = \square$$



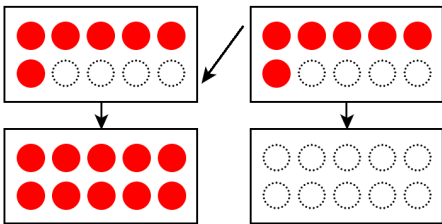
$$\square + \square = \square$$

$$8 + 4 = \square$$



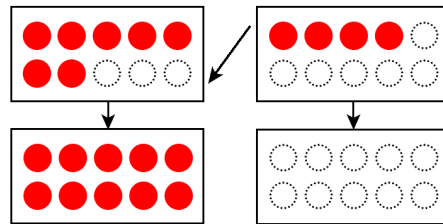
$$\square + \square = \square$$

$$6 + 6 = \square$$



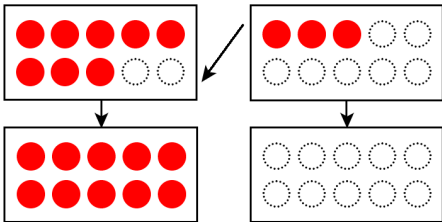
$$\square + \square = \square$$

$$7 + 4 = \square$$



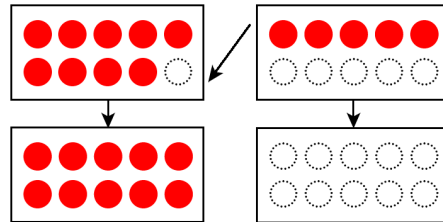
$$\square + \square = \square$$

$$8 + 3 = \square$$



$$\square + \square = \square$$

$$9 + 5 = \square$$



$$\square + \square = \square$$